

Mental mathematics Test A

First name

Last name

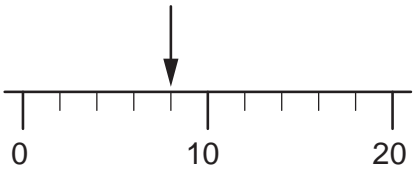
School \_\_\_\_\_

Total marks

Practice question

		37	
--	--	----	--

Time: 5 seconds

1		<input type="text"/>	1

2		300	2
---	--	-----	---

3		9	3
---	--	---	---

4	mm	<input type="text"/>	4
---	----	----------------------	---

5		-2	5
---	--	----	---

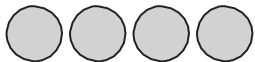
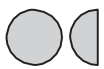
6		<input type="text"/>	6
---	--	----------------------	---

Time: 5 seconds continued

7		3.68	7
---	--	------	---

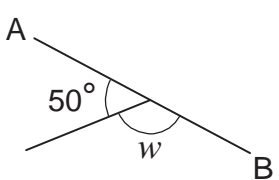
8		$10y^2 - 3y^2$	8
---	--	----------------	---

Time: 10 seconds

9	Right		<input type="text"/>	9
	Wrong			
pupils				

10	cm	<input type="text"/>	10
----	----	----------------------	----

11	13					11
	$\frac{1}{8}$	$\frac{1}{4}$	$\frac{1}{3}$	$\frac{1}{2}$	$\frac{3}{4}$	

12	<input type="text"/>		12

13		$2x - 8$	13
----	--	----------	----

14	10cm : 2km	15cm	14
	km		

15		<input type="text"/>	15
----	--	----------------------	----

16	£	5%	£300	16
----	---	----	------	----

Time: 10 seconds continued

17	2cm by 8cm by 4cm		17
	cm <sup>3</sup>		

18	m	£4.50	£27	18

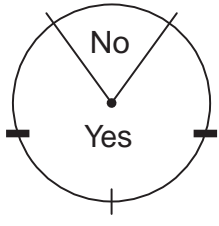
19	cm	8cm	19

20	£	1 : 3	£150	20

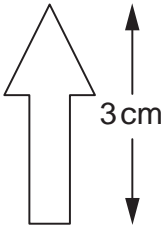
21	$y(y - 3)$		21

Time: 15 seconds

22	$27 \times 32 = 864$	22
	$27 \times 16 =$ <input type="text"/>	

23	_____		23

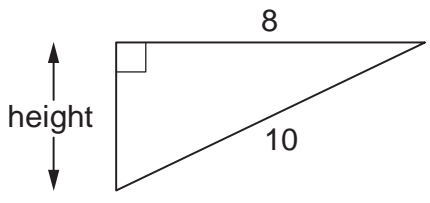
24	50		24

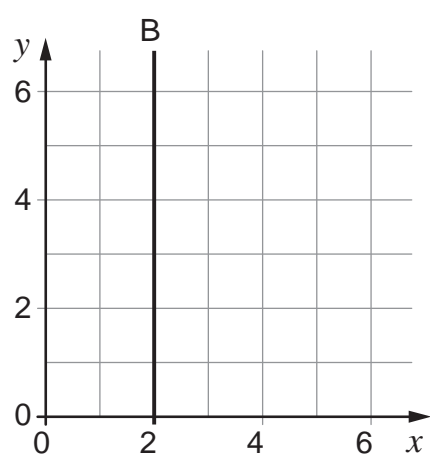
25	_____cm		25

Time: 15 seconds continued

26	Number of milk bottles		Frequency		26
	0		6		
	1		3		
	2		8		
	3		1		
	4		2		

27	$\sqrt{40000}$	27

28		28

29		29

30	$9 \times 9$		30